

MILESTONE ACADEMY
SUMMER VACATION HOME WORK (2021-22)
CLASS – VII

SUBJECT-ENGLISH

Q1. Imagine you are the king. Narrate the incident of your meeting with the hermit.



Q2. Write the moral of the story “The Tiny Teacher” and make a cartoon related to the story.



Q3. Choose any two characters from any chapters (prose, poem or supplementary) and how do you influence them? (Word Limit 100 – 120)

Q4. Fun Activity; Scampering squirrel art (M/R - paint in autumn colours, optional gold glitter paint, black paint and scrapping objects, brushes and thin cardstock).

Q5. Write an E – mail to your cousin about planning of new house in future.



HINDI

1. आप अपने स्कूल की यादों को अपने मित्र को पत्र लिखकर बताइए ।
2. हिंदी और अंग्रेजी के एक जैसे दस मुहावरों को लिखिए ।
3. अपने द्वारा लिखे नाटक का वीडियो बनाइए ।

MATHS



- *It's SUMMER TIME again. Time for straightening family bound trying threats of family trees sharing joy and sorrow have been having a good time together.
- * Look for interesting books and read as much as you can about the place and people. Take good care of your health and hygiene. Avoid heavy and oily food and increase intake of fresh fruits and water to keep yourself well hydrated and energetic.
- *Use holidays homework as an opportunity to spend quality time together the role of parents is to be a a facilitator and guidance to state the child in the right direction original work of students will receive greater recognise and appreciation

Take a political map of India, draw the following line segments and answer the questions that follows.

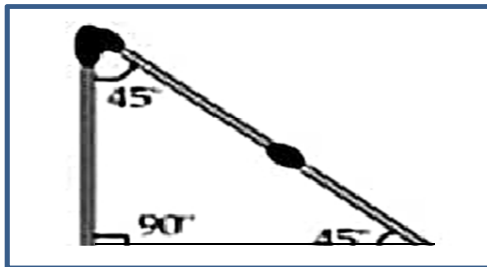
- a) Joint Srinagar to Thiruvanthpuram and name it AB
- b) Imphal to Gandhinagar and name it CD.
- c) Itanagar to Shimla and name it EF
- d) Patna to Chennai and name it GH

QUESTION:

- i) Which is the shortest line segment?
- ii) Which line segment passes through Arabian Sea?
- iii) Which line segment passes through a country other than India?
- iv) Which line segment passes through the maximum States?

Polygons using matchsticks make a triangle, a quadrilateral and a pentagon. Name all the vertices and measure all the angles so found in each figure.

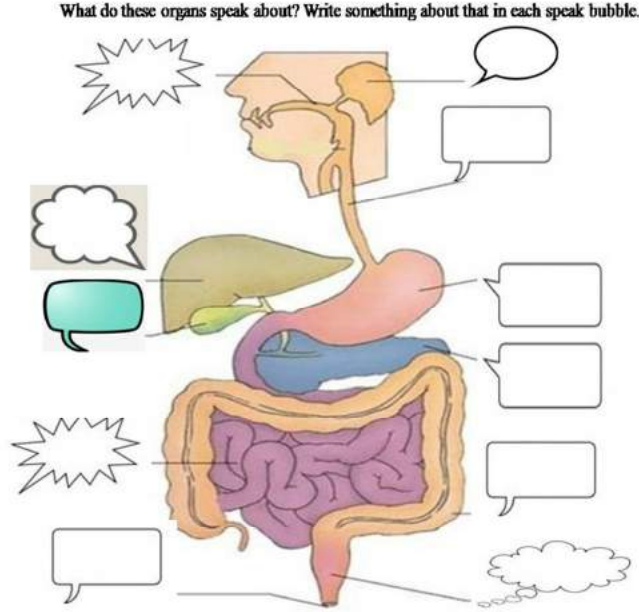
For example:-



SCIENCE

- Q.1. a) What do you understand by Covid-19? Write a note on the preventive measures to be adopted.
b) How it is affecting the body system?

Q.2



- Q.3. Create a mini puppet show by making puppets of different fabrics like wool, cotton, etc. and submit a video (maximum 10 minutes) on the following topics: Environmental Pollution, Varieties of Fabric, Diet and our health, Leaves: as a food factory and Conservation of natural resources.

Q.4. Why is daily exercise important for us to maintain good health?

Q.5. Prepare a diet chart for the different age groups such as 11 years old child, an athlete and senior citizens.

SANSKRIT

प्र.1 पाँच (5) सूक्तियाँ उनके हिंदी अर्थ सहित लिखो ।

प्र.2 'संस्कृतभाषायाः महत्त्वम्' विषयस्य उपरि पञ्च वाक्यानि लिखत ।

COMPUTER

Q1.Create an attractive school timetable in excel .

OR

Create an attractive cricket score board in excel.

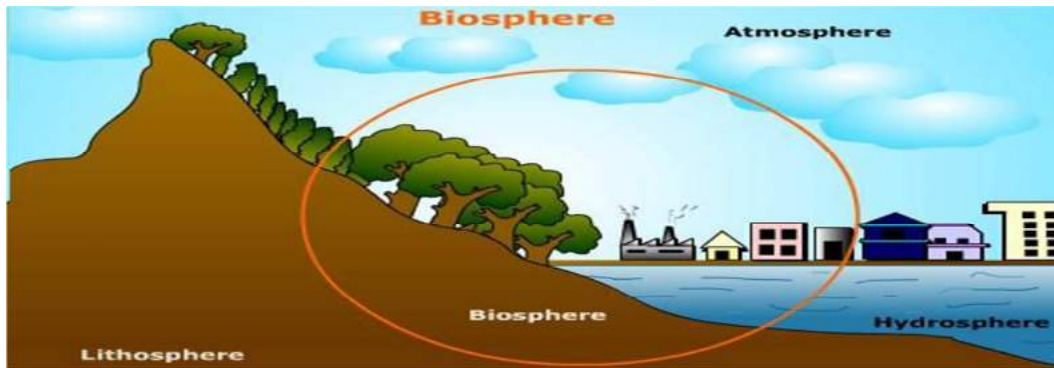
SOCIAL SCIENCE

Q.1) On the basis of the given picture answer the following questions :



1. What is a Parliament?
2. Who has written our Indian Constitution?
3. Explain few features of the Indian Constitution.

Q.2)



In the given picture of domains of the environment . Write few features on each of them i.e Biosphere, Atmosphere, Hydrosphere and Lithosphere .

Q.3) Look at the picture and answer the questions :



1. Which state introduced this scheme for the first time in India .
2. Discuss with your parents about the mid day meal scheme . Make a video on the scheme .