


MILESTONE ACADEMY SUMMERCATION HOME WORK

DATE:-
NAME:-

CLASS - 3
SEC:-

Note:-

1. The vacation Home Work is to help your child to be busy. The Work will be assessed after submission.
2. All the written work of every subject has to be done in a Single Note Book / Practice Copy.
3. Drawing & Craft Work to be done in the $\frac{1}{4}$ chart papers & stapled together.
4. Complete your vacation homework neatly and go through the instructions properly.
5. Do your homework daily in order to complete it on time.
6. If you face any difficulty while completing your homework, feel free to contact your class or subject teachers for any queries.
7. Submit your vacation homework on **16th June 2026**



Q.4

PUNCTUATION SENTENCE

Read the sentence, choose the correct punctuation, and Colour the circle.

I have two dogs



Who is singing



How old are you



Sing a song



Can you see a rainbow



Drink a lot of water



We went to the zoo



Do you have an eraser



We'll played boys



Are you crazy



This is dad's wallet



Do you want sandwich



Close the door



You are amazing



How are you



Can I play now



Stand in a line



No fighting



Who is shouting



Where is your car



I love my mom



I saw a great movie



You had lunch



Are you thirsty



Do you like icecream



I am the best



SEQUENCING

Snow Day

Suzie had just woken up when she heard on the television that there was going to be a lot of snow.

"Is school cancelled, Mommy?" she asked with excitement.

"Yes, Suzie. It looks like you're having your first snow day!" Suzie got dressed in her warmest coat, and her warmest mittens then put on her snow boots. She looked outside and all the children were piling out of their houses, excited to play in the snow. She decided she would first go sledding. "Weeeeeeee!" down the hill she went. And then she decided to make a snowman and put an old hat on his head. Then there was a snowball fight with all her friends! What fun she was having on her first snow day!

Instructions: Put the story events in the correct water.

- _____ Suzie got dressed warmly.
- _____ She saw that all the kids were coming out to play.
- _____ Suzie and her friends had a snowball fight.
- _____ Suzie made a snowman with all her friends.
- _____ Suzie asked her mom if school was cancelled.
- _____ Suzie heard that there would be alot of snow.
- _____ Suzie went sledding.

Q.6

Match Broken Words



Match the words and re-write in the complete word

- | | | | |
|---------|-----|---|-------|
| 1. lar | net | = | _____ |
| 2. mat | gth | = | _____ |
| 3. rec | ond | = | _____ |
| 4. sec | son | = | _____ |
| 5. num | ger | = | _____ |
| 6. pla | ord | = | _____ |
| 7. sea | ect | = | _____ |
| 8. len | ter | = | _____ |
| 9. mot | ple | = | _____ |
| 10. sm | ber | = | _____ |
| 11. tra | ice | = | _____ |
| 12. sin | her | = | _____ |
| 13. obj | vel | = | _____ |
| 14. peo | gle | = | _____ |
| 15. off | all | = | _____ |

Q.7

Verb 'To Be'

Complete the sentences with correct verb.

is

are

am

1. Today _____ her birthday.
2. My sister _____ 18 now.
3. I _____ sad for my friends.
4. _____ he not guilty?
5. _____ you a thief?
6. The boys _____ still asleep.
7. She _____ from New Zealand.
8. Rohan _____ organizing a get together.
9. I think you _____ funny.
10. It _____ a truck.
11. The book _____ interesting.
12. The eggs _____ in the nest.
13. I _____ going to school.
14. Mr. Das _____ my teacher.
15. The cat _____ white.



Q.8

CIRCLE THE CORRECT SPELLING

Circle the correct spelling of each word.

- | | | | |
|-----|-------|-------|--------|
| 1. | over | ovur | aver |
| 2. | naw | new | newe |
| 3. | art | ort | arte |
| 4. | tak | taik | take |
| 5. | only | onley | olny |
| 6. | kar | car | carr |
| 7. | parc | pairk | park |
| 8. | harde | hard | hrd |
| 9. | barn | barne | barrn |
| 10. | kard | card | carde |
| 11. | shark | sharc | schark |
| 12. | darc | dark | drak |
| 13. | ooh | ohe | oh |
| 14. | eyes | eiys | iyes |
| 15. | dait | dat | date |
| 16. | hold | houd | hould |

Q.9 Read this story in your free time and write its summary in your vacation home work copy.

The Honest Woodcutter



A poor woodcutter once lost his axe in a river while cutting trees. Feeling sad, he prayed for help and promised to be honest. The River Goddess appeared and offered him three axes—golden, silver, and his iron one. The woodcutter honestly said, “The iron axe is mine; the others are not.” Pleased by his honesty, the Goddess gave him all three axes as a reward.

Moral: Honesty is always rewarded.

Q.10 Read this story in your free time and write its summary in your vacation home work copy.

The Lost Hat

One sunny morning, Lily the bunny hopped out of her burrow, excited to play outside. She put on her favorite red hat, the one with a blue flower on it. “I’ll wear this all day!” she said happily as she skipped toward the meadow to pick flowers and chase butterflies.

Lily played with her friends Max the squirrel and Bella the bird. They laughed and ran and flew around the tall grass. But when Lily sat down to rest, she realized something was missing—her red hat! “Oh no!” she cried. “I must have lost it while we were playing!”

Max and Bella quickly offered to help. “Let’s retrace your steps,” Max said. They searched near the pond, under the trees, and even inside a hollow log. Still, no red hat. Lily felt sad. “Maybe I’ll never find it,” she sighed.

Just then, Bella flew high into the sky and shouted, “I see something red near the flowers!” Everyone rushed over. There, caught on a bush, was Lily’s hat, gently swaying in the breeze.

“Hooray!” Lily cheered as she hugged her friends. “Thank you for helping me!”

Q.1

गतिविधि 1- परिचय

1. अपना संक्षिप्त परिचय लिखें। (5 या अधिक वाक्य)

उदाहरण के लिए: मेरा नाम _____ है। मैं कक्षा... में पढ़ता / पढ़ती हूँ।

मेरा परिचय

Blank lined area for writing the answer.

Q.2 चित्र में रंग भरौ।

मेरा घर



बड़ा सुंदर अच्छा
कमरे रंग
दीवार पौधे दरवाजे
खिड़की आँगन

दिए गए शब्दों से १० वाक्य बनाइये ।

१. _____
२. _____
३. _____
४. _____
५. _____
६. _____
७. _____
८. _____
९. _____
१०. _____

Q.3

वर्ग पहेली - जंगली जानवर

शब्द खोज पहेली से वन्य प्राणियों के नाम खोजें और लिखें।

Find and write the wild animal names from the word search puzzle.



गा	गैं	अ	ना	र	वी	गु
भा	डा	कु	ट	सि	ची	लो
लू	इ	भे	डि	या	ता	म
ति	अ	ज	ग	र	ब	डी
बं	शे	र	हि	फ	बा	घ
द	त्र	ख	र	गो	श	च
र	हा	थी	न	कं	गा	रू

Q.5 Reading Comprehension

गद्यांश (Passage):

गर्मी की छुट्टियों में नेहा अपने माता-पिता के साथ पहाड़ों पर घूमने गईं। वहाँ का मौसम बहुत सुहावना था। चारों ओर ऊँचे-ऊँचे पहाड़, हरे-भरे पेड़ और झरनों का मधुर संगीत सुनाई देता था। नेहा को वहाँ का शांत वातावरण बहुत अच्छा लगा। उसने पहली बार इतने पास से बादलों को देखा।

नेहा रोज़ सुबह जल्दी उठकर अपने पिताजी के साथ टहलने जाती थी। रास्ते में वह रंग-बिरंगे फूल देखती और पक्षियों की आवाज़ सुनती। उसकी माँ उसे पहाड़ों की विशेष बातें बताती थीं। नेहा ने वहाँ बहुत सारी तस्वीरें भी खींचीं। शाम को वह होटल की बालकनी में बैठकर डूबते सूरज का सुंदर दृश्य देखती थी।

इन छुट्टियों में नेहा ने सीखा कि प्रकृति हमें शांति और खुशी देती है। उसने यह भी समझा कि हमें पेड़ों और पहाड़ों की रक्षा करनी चाहिए। छुट्टियाँ समाप्त होने पर वह बहुत सारी मीठी यादें लेकर घर वापस आई।

I. लघुउत्तरीय प्रश्न (Short Answer Questions)

1. नेहा गर्मी की छुट्टियों में कहाँ गईं?

2. वहाँ का मौसम कैसा था?

3. नेहा सुबह किस के साथ टहलने जाती थी?

4. नेहा की माँ उसे क्या बताती थीं?

5. नेहा ने छुट्टियों में क्या सीखा?

6. आपको पहाड़ों की कौन-सी बात अच्छी लगती है?

7. “प्रकृति हमें क्या देती है?” अपने शब्दों में लिखिए।

II. शब्दार्थ लिखिए (Word Meaning)

1. सुहावना = _____

2. वातावरण = _____

3. रक्षा = _____

III. रिक्त स्थान भरिए

1. नेहा अपने _____ के साथ पहाड़ों पर गई।

2. रास्ते में नेहा _____ फूल देखती थी।

3. शाम को नेहा _____ का दृश्य देखती थी।

IV. सही या गलत लिखिए

1. नेहा समुद्र के किनारे घूमने गई थी। (_____)

2. नेहा ने बहुत सारी तस्वीरें खींचीं। (_____)

3. नेहा ने प्रकृति की रक्षा का महत्व समझा। (_____)

V. वाक्य बनाइए

1. मौसम :- _____

2. पहाड़ :- _____

3. खुशी :- _____

निर्देश:- गद्यांश को ध्यान से पढ़ें। पूरे वाक्यों में उत्तर लिखें। साफ और सुंदर लिखावट रखें।

Q.1

What comes after?

67

59

64

54

86

93

77

99

74

85

90

79

What comes before?

← 84

← 96

← 68

← 72

← 91

← 88

← 75

← 65

← 55

← 92

← 62

← 71

What comes in between?

58 60

85 87

69 71

75 77

63 65

57 59

54 56

79 81

94 96

87 89

70 72

82 84

Q.2

Even and Odd Numbers

Even Numbers

The numbers that end with 0, 2, 4, 6, 8 are called even numbers. Some even numbers are-



- 2
- 4
- 24
- 28
- 50
- 76




Odd Numbers

The number that do not end with 0, 2, 4, 6, 8 are called odd numbers. Some odd numbers are-

- 1
- 5
- 9
- 17
- 33
- 99

Even and Odd Numbers

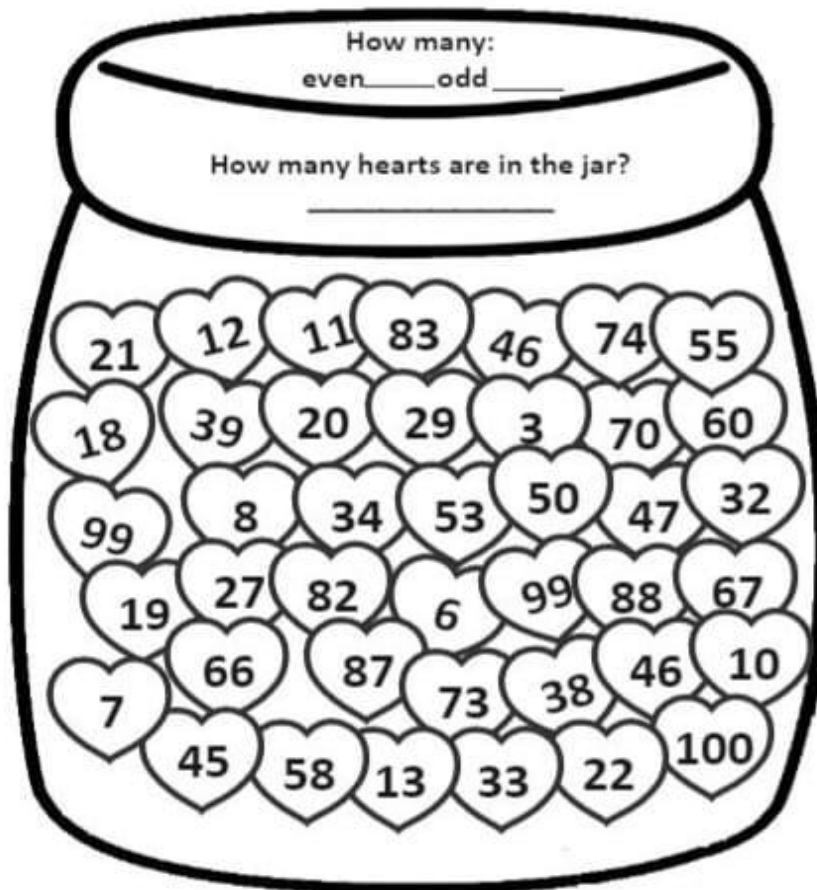
Directions: Color the candy hearts according to the color code.



= even



= odd



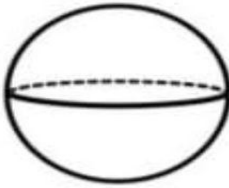
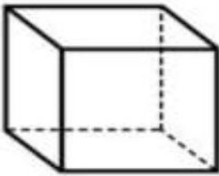
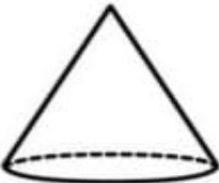
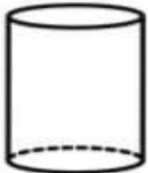

Q.3 Add and Subtract the following:

1. $\begin{array}{r} 30 \\ + 78 \\ \hline \end{array}$	2. $\begin{array}{r} 23 \\ + 66 \\ \hline \end{array}$	3. $\begin{array}{r} 50 \\ - 22 \\ \hline \end{array}$	4. $\begin{array}{r} 11 \\ + 13 \\ \hline \end{array}$	5. $\begin{array}{r} 64 \\ - 28 \\ \hline \end{array}$
6. $\begin{array}{r} 69 \\ - 53 \\ \hline \end{array}$	7. $\begin{array}{r} 15 \\ + 93 \\ \hline \end{array}$	8. $\begin{array}{r} 43 \\ + 28 \\ \hline \end{array}$	9. $\begin{array}{r} 12 \\ + 30 \\ \hline \end{array}$	10. $\begin{array}{r} 39 \\ - 20 \\ \hline \end{array}$
11. $\begin{array}{r} 70 \\ + 71 \\ \hline \end{array}$	12. $\begin{array}{r} 14 \\ + 48 \\ \hline \end{array}$	13. $\begin{array}{r} 95 \\ - 86 \\ \hline \end{array}$	14. $\begin{array}{r} 20 \\ + 37 \\ \hline \end{array}$	15. $\begin{array}{r} 58 \\ - 23 \\ \hline \end{array}$
16. $\begin{array}{r} 82 \\ - 74 \\ \hline \end{array}$	17. $\begin{array}{r} 52 \\ - 51 \\ \hline \end{array}$	18. $\begin{array}{r} 72 \\ + 50 \\ \hline \end{array}$	19. $\begin{array}{r} 53 \\ + 29 \\ \hline \end{array}$	20. $\begin{array}{r} 90 \\ - 90 \\ \hline \end{array}$
21. $\begin{array}{r} 47 \\ + 50 \\ \hline \end{array}$	22. $\begin{array}{r} 78 \\ + 24 \\ \hline \end{array}$	23. $\begin{array}{r} 60 \\ + 61 \\ \hline \end{array}$	24. $\begin{array}{r} 94 \\ - 83 \\ \hline \end{array}$	25. $\begin{array}{r} 91 \\ - 79 \\ \hline \end{array}$

Q.4 Word problem :-

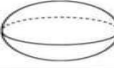

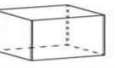


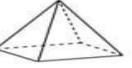
1. Anil had 64 marbles and Peter had 35. How many did they have in total?
2. John's farm has 82 pigs, 14 cows and 16 sheep. How many animals altogether?
3. Seema picked 52 flowers on Monday, 44 flowers on Tuesday and 16 flowers on Wednesday. How many flowers did she pick altogether?
4. In a garden, there are 21 mango trees, 14 orange trees and 16 apple trees. What is the total number of fruit trees in the garden?

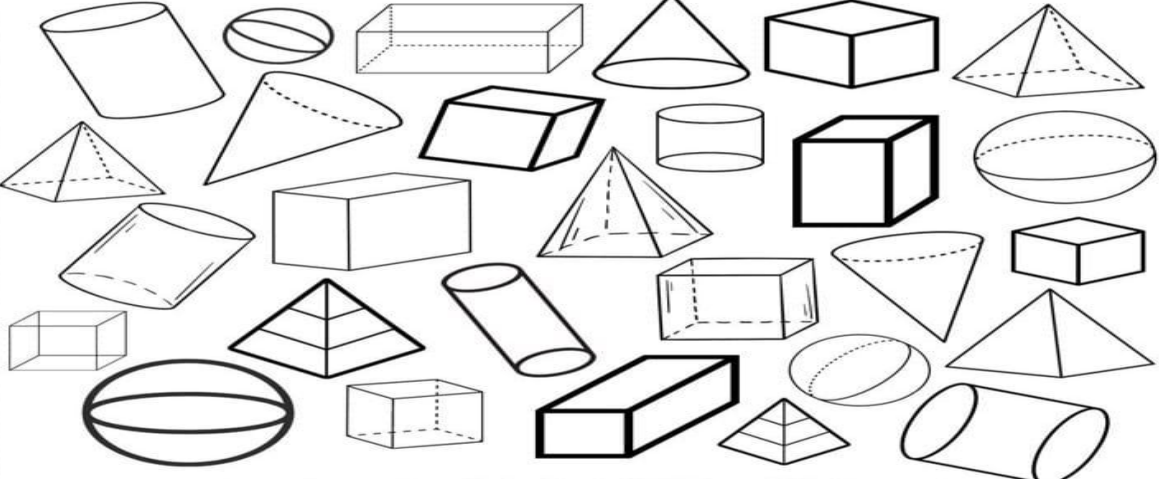
Q.5 Complete the following table:

	Faces	Edges	Vertices
 sphere			
 cube			
 cone			
 cylinder			
 Cuboid			

Q.6 Let's have fun :

COLOR & COUNT
Color the shapes according to the color code
How many shapes are there? Count and write.

					
Green	Red	Yellow	Purple	Blue	Orange



Q.7 Shapes & Geometry

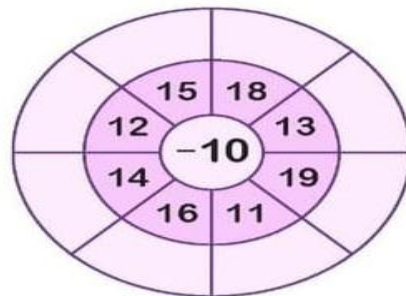
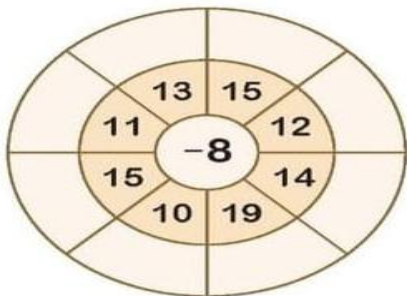
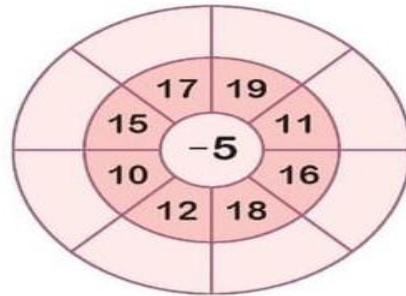
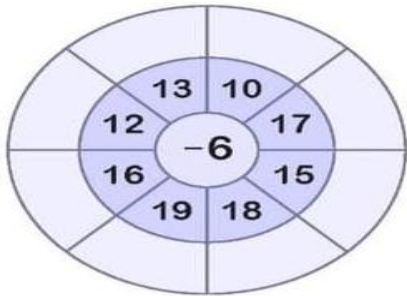
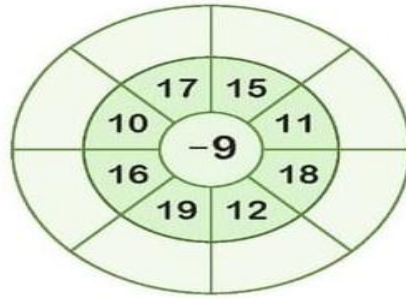
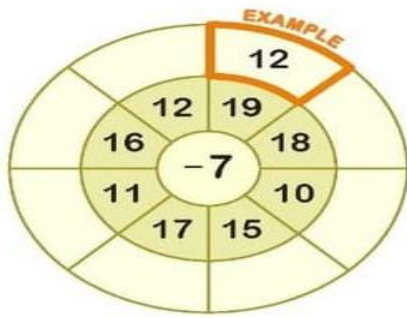
Find at home:

- i. Two cubical objects _____
- ii. Two cuboidal objects _____
- iii. Two spherical objects _____
- iv. Two cylindrical objects _____

Q.8 Who am I ?

- i. I come between 40 and 50 and there is a 5 in my name. _____
- ii. I have 9 in my name and am very close to 90. _____
- iii. If you hit a 4 after me, you score a century. _____
- iv. I am equal to ten notes of 10. _____
- v. I am century + half century. _____
- vi. I am exactly in between 77 and 97. _____
- vii. I am a number with 3 in hundreds place, 8 in tens place and 6 in ones place. _____
- viii. I am a number with 9 in hundreds place, 4 in tens place and 1 in ones place. _____
- ix. I am a number with 3 in hundreds place, 0 in tens place and 6 in ones place. _____
- x. I am a number with 2 in hundreds place, 8 in tens place and 2 in ones place. _____

Q.9 Subtract the number in the centre from the numbers on the outside. The first one has been done for you.



Q.10.

ADDITION & SUBTRACTION WITHIN 20

Crossword Puzzles

20	-	12	=			19				
-				+		-				
			-	3	=		+	4	=	
=				=		=		+		-
15						6				8
								=		=
20	-		=	18	-		=	15		9
-				+		+				
16		15	-		=	14				
=				=		=				
				19		17				

SUBJECT –G.SC.

Q.1 Draw/Cut and Paste Activity

Draw/cut pictures of 10 living things and 10 non-living things from magazines or newspaper and paste them in your vacation homework copy.

Living Things	Non-Living Things

Q.2 Riddle Time – Guess the Plant Part and write in the blank space:

1. I stay under the ground and drink water. Who am I? _____
2. I am green and make food using sunlight. _____
3. I am colorful and turn into fruit. _____
4. I stand tall and hold the plant. _____

Q.3 Fun Activity – Plant Detective

Go around your surroundings and find a plant which has fibrous root.

- Draw its roots in ¼ th chart paper:
- Does it have flowers? _____
- Are the leaves big or small? _____

Q.4 Crack the code.

Each letter has a number:

1 = R, 2 = O, 3 = T

Decode:

1 – 2 – 2 – 3 → _____

Q.5 Underline what is wrong and rewrite the correct sentence.

1. A chair is a living thing.
→ _____
2. Roots grow above the ground.
→ _____
3. Leaves do not make food.
→ _____

Q.6 Riddle Puzzle

“I am not alive, I cannot grow,
You use me daily, this you know!”
What am I? _____

Q.7 Creative Task

Make a plant using:Threads (for fibrous roots)

Q.8 Imagine & Answer

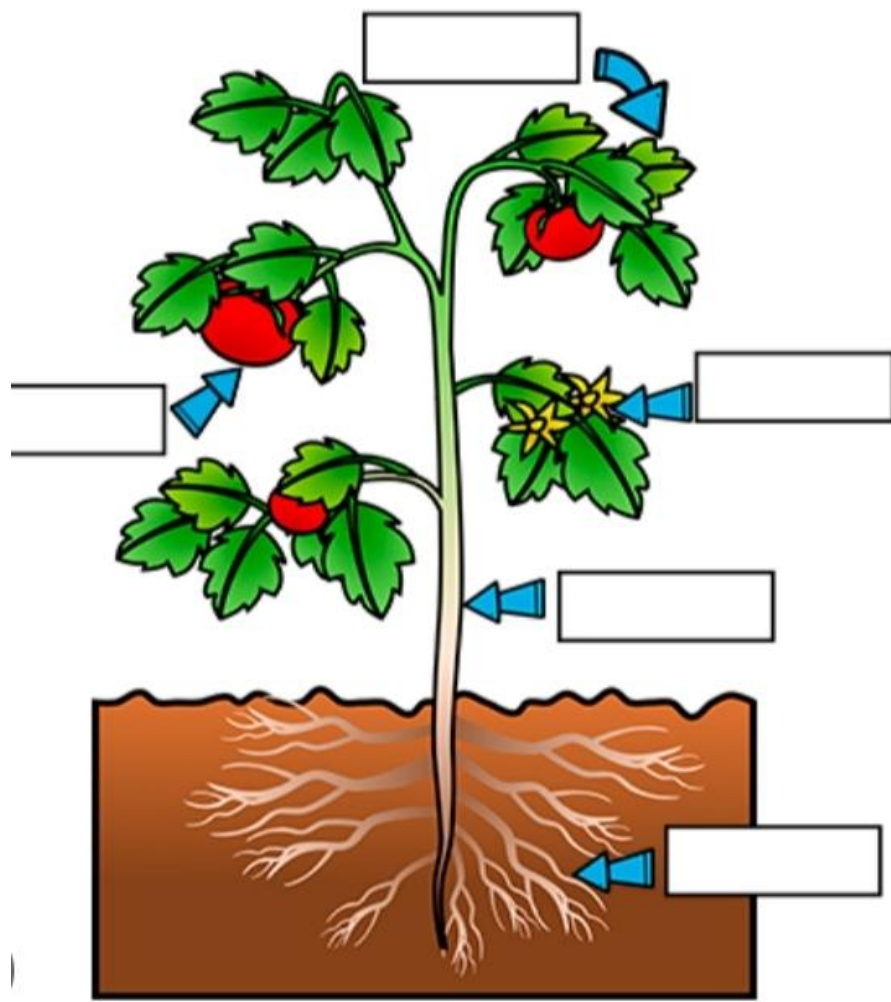
If a plant had no roots, what would happen?

Q.9 Creative Challenge

- Design a rainbow plant
- Purple leaves
- Blue stem
- Red roots
- Yellow flower
- Label all parts!
- Draw it in your vacation homework copy.

Q.10 Draw and write the names of the parts of a plant in your vacation homework copy.

Parts of a plant



Q.1

All About Earth

READING COMPREHENSION



Earth is the third planet from the Sun. It is a rocky planet and the only planet known to have life. Earth has water, air, and the right temperature for living things.

Earth looks blue and green from space because of the oceans, land, and white clouds. Unlike Mercury and Venus, Earth has a moderate temperature, thanks to its atmosphere, which protects us from the Sun's harmful rays.

Earth has one moon, which helps control the ocean tides. Earth also has no rings.

A year on Earth lasts 365 days, which is how long it takes Earth to orbit the Sun. A day on Earth is 24 hours, the time it takes to spin once on its axis.

Earth is about 150 million kilometers from the Sun. This distance helps keep our planet warm enough but not too hot.

A fun fact about Earth is that it is the only planet not named after a god or goddess.

A. Read the text about Earth and decide whether the sentences are true or false.

- | | | |
|--|------|-------|
| 1. Earth is the first planet from the Sun. | True | False |
| 2. Earth is a rocky planet. | True | False |
| 3. Earth has no moons. | True | False |
| 4. A year on Earth is 365 days long. | True | False |
| 5. Earth is the only known planet with life. | True | False |
| 6. Earth is completely covered in water. | True | False |

B. Answer the questions about Earth

1. Why can life exist on Earth?
2. What does Earth look like from space? What color is it?
3. How long is one day on Earth?
4. How long is one year on Earth?
5. What makes Earth different from the other planets?

Q.2

I AM...

Positive Affirmation Word Search

Can you find the words hidden in the puzzle?



KIND

SMART

HELPFUL

AWESOME

BRAVE

STRONG

FRIENDLY

CAPABLE


LOVED

HAPPY

CARING


JOYFUL

Q.3



Q.4 Look at these cartoon faces and answer the following questions:

Look at all these cartoon faces!



- a) How many faces are there in total?
- b) How many are either smiling or laughing?
- c) How many have one eye closed and one eye open?
- d) How many open eyes are there in total?
- e) Without counting, work out how many closed eyes there must be.
- f) How many are either wearing glasses or sticking out their tongue?
- g) How many are both wearing glasses and sticking out their tongue?

Q.1

Fill in the boxes with the letters “ I , P and O “ .


I - Input P-Process O -Output

Making Orange Juice




		
<input type="text"/>	<input type="text"/>	<input type="text"/>

Teacher remarks

Making Birthday cake

		
<input type="text"/>	<input type="text"/>	<input type="text"/>




Making clay model

		
<input type="text"/>	<input type="text"/>	<input type="text"/>






Adding two numbers

15 + 25 =	15 and 25	Sum = 40
<input type="text"/>	<input type="text"/>	<input type="text"/>







When you do some works on the computer ...

		
<input type="text"/>	<input type="text"/>	<input type="text"/>

Q.3 Complete the table:








	Name of the device	Input/Output
	_____	_____
	_____	_____
	_____	_____
	_____	_____
	_____	_____

Q.4 . Identify the hardware and the software and tick (✓) the correct column.

	Hardware	Software		Hardware	Software
					
			 ANDROID		
					

Q.5 Match the following words with the correct picture.

1. Brush
2. Shapes
3. MS Paint
4. Eraser tool
5. Paint pot
6. Pencil
7. Undo

• 
• 
• 
• 
• 
• 
• 

Q.6 Draw a village scenery in MS Paint and paste it on a A4 size chart paper.

SUBJECT – ART & CRAFT

Art :- Make a drawing using flower impression (Garden, Greeting Card, Flower Pot) by using water colour on 1/4th white chart paper.

Craft:- (paper Collage)

Create a landscape collage by layering torn or cut coloured papers.