


MILESTONE ACADEMY SUMMER VACATION HOME WORK

DATE:-
NAME:-

CLASS - 4
SEC:-

Note:-

1. The vacation Home Work is to help your child to be busy. The Work will be assessed after submission.
2. All the written work of every subject has to be done in a Single Note Book / Practice Copy.
3. Drawing & Craft Work to be done in the $\frac{1}{4}$ chart papers & stapled together.
4. Complete your vacation homework neatly and go through the instructions properly.
5. Do your homework daily in order to complete it on time.
6. If you face any difficulty while completing your homework, feel free to contact your class or subject teachers for any queries.
7. Submit your vacation homework on **16th June 2026**



Q.1 Pick any 5 objects from your home.

Your task:

- (a) Write the name of each object ?
- (b) Describe them using 2-3 words
(color, size, use, shape)

Q.2 Write about-

- a. My self
- b. My best friend
- c. If I had a magic power
- d. If I were invisible
- e. What would happen if animals could talk?


Q.3 Pick The Punctuation

Read each line, and Color the correct punctuation

- Wow, that rainbow is beautiful (?) (!) (.)
- Be careful on the stairs (?) (!) (.)
- She loves to read books (?) (!) (.)
- What time does the bus arrive (?) (!) (.)
- Can you tie your shoelaces (?) (!) (.)
- The cat is sleeping (?) (!) (.)
- Can you swim (?) (!) (.)
- We went to the park yesterday (?) (!) (.)
- Why did the chicken cross the road (?) (!) (.)
- The flowers bloom in spring (?) (!) (.)
- My mom makes delicious cookies (?) (!) (.)
- Look at those fluffy clouds (?) (!) (.)
- The sun shines brightly in the sky (?) (!) (.)
- The moon is shining tonight (?) (!) (.)
- Let's play hide and seek (?) (!) (.)

Q.4 Read the given paragraph and draw emoji in the correct column:

The Accident



Kendra and her mom left their house on Oak Street to go to school. Kendra put on her safety belt. About that same time, Lacey and her mom left their house on Maple Street. On the way to school, Lacey bounced up and down on the seat watching her pigtails fly up and down in the mirror. She had forgotten to wear her safety belt. Both moms turned into the school parking lot at the same time, and

they crashed into each other! Kendra was not hurt. Her safety belt kept her in her seat. But, Lacey fell forward and bumped her head **HARD!** She cried and cried. She had to go to the hospital and get an X ray. Lacey got well in a day or two, but she learned an important lesson!

Draw a 😊 in the correct column.

	Kendra	Lacey	Both
driven to school by Mom			
wore a safety belt			
didn't wear a safety belt			
lives on Maple Street			
was in a wreck			
bumped her head			
got an X ray			
lives on Oak Street			
bounced up and down in the car			
didn't get hurt			
learned a lesson			

Cool Clouds

Have you ever looked up in the sky and seen a cloud that is shaped like an animal or a person? Big, white, puffy clouds float along like soft marshmallows. In cartoons, people can sit on clouds and bounce on them. But clouds are really just tiny drops of water floating in the air. You can understand what being in a cloud is like when it is foggy. Fog is a cloud on the ground!

Read each sentence below. If the sentence could really happen, color the cloud blue. If the sentence is make-believe, color it orange.

Clouds float in the sky.

A cartoon dog sleeps on a cloud.

Clouds are made of tiny drops of water.

Animal shapes in clouds are made by the Cloud Fairy.

Clouds are big blobs of whipped cream.

Clouds are made of marshmallows.

Fog is a cloud on the ground.

Birds can hop around on clouds.



SEQUENCING

Sasha Gets a Puppy

Sasha really, really wants to get a puppy. Her mom said that if she learns to take care of one then they will go to the shelter together and adopt a puppy. So Sasha then got a job as a dog-walker so she could get some practice working with puppies. She would go to her neighbors houses every day, and walk their dogs to the dog park. She would get them water, play with them and brush their fur before taking them back to their owners. After a few weeks Sasha had learned a lot about caring for puppies! Her mom took her to the local dog shelter, and Sasha adopted her very own puppy!

Instructions: Put the story events in the correct water.

- _____ Sasha has learned a lot about caring for a puppy.
- _____ Sasha got a job a dog-walker.
- _____ Sasha went to the shelter, and adopted a puppy.
- _____ Sasha walked the dogs to the dog park.
- _____ Sasha has to learn how to take care of a puppy.
- _____ She would get the dogs water at the dog park.
- _____ Sasha really wants a puppy.

Q.7


TWINS TOGETHER

Antonyms are words that mean the opposite.

Tom and Tyrone are twins, but they are quite different. The words in them are quite different, too. Match each word in Twin Tom with its opposite in Twin Tyrone. Write the letter of the opposite (antonym) on the line.


Twin Tom

Twin Tyrone



Q.8 Read this story in your free time and write its summary in your vacation homework copy.

The Ant and the Grateful Dove

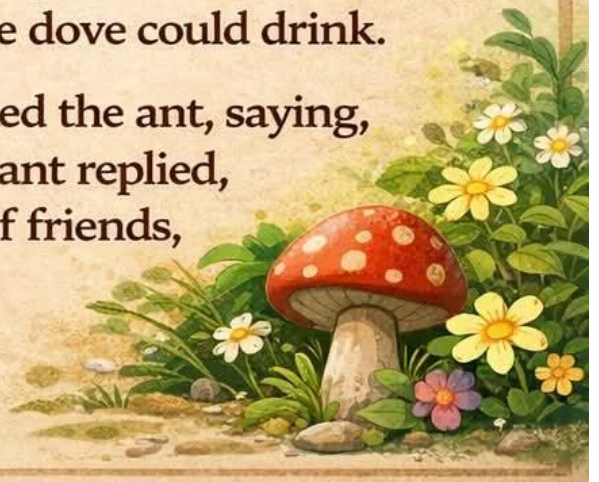


One hot day, a thirsty dove saw a pot at the bottom of a deep well. It flew down to the well, where it found only a little water out of reach.

A kind little ant passed by and saw the sad dove. It got an idea and began dropping pebbles into the pot in the well, one by one. Slowly, the water level rose until the dove could drink.

Grateful and happy, the dove thanked the ant, saying, "I will never forget your help." The ant replied, "Kindness, even from the smallest of friends, can make a big difference!"

Moral: Even the tiniest friend can lend a helping hand.



Q.9 Read this story in your free time and write its summary in your vacation homework copy.



The Rabbit and the Friendly Dragon

In a peaceful forest, a small rabbit struggled to light his campfire after the rain left his matches and kindling wet.

A friendly dragon, drawn by the rabbit's distress, appeared, offering help.

"Perhaps I could assist?" the dragon suggested with a warm, gentle smile.

Blowing a soft, golden flame from his mouth, the dragon dried the wet wood, lighting the rabbit's campfire in a warm, inviting glow.

Gratefully, the rabbit glanced up at the dragon and said.

"Thank you, kind dragon. I'm so grateful for your help."

Moral: Small acts of kindness can forge the strongest of friendships!

प्रश्न 1. 'इतना-सा' , 'उतना-सा' , 'जितना-सा' और 'कितना-सा' का वाक्यों में प्रयोग कीजिए और उनके अर्थ भी समझाइए।



सलमा, तुम्हें कितने पैसे चाहिए?

जितने पैसे राजू को मिले।



तुम्हें उतने नहीं मिल सकते।

तो मुझे कितने पैसे मिल सकते हैं?



केवल पचास रुपये।

नहीं, मुझे राजू जितने ही रुपये चाहिए।



इतने पैसे तो ऐसे नहीं मिल सकते।

तो फिर कैसे मिल सकते हैं?



अब नीचे दिए गए शब्दों से वाक्य बनाकर सलमा की सहायता कीजिए -

इतना-सा :- _____

उतना-सा :- _____

जितना-सा :- _____

कितना-सा :- _____

प्रश्न 2. नीचे दिए गए अक्षर जाल में पक्षियों के नाम खोजिए और उनके बारे में जानकारी एकत्र कीजिए।

नी	ल	कं	ठ	ती
मै	ब	त	ख	त
ना	क	बू	त	र
ची	ल	गौ	रै	या
बु	ल	बु	ल	बा
सा	र	स	बा	ज

प्रश्न 3. नीचे कुछ रोचक और चुनौती पूर्ण पहेलियाँ दी गई हैं। शीघ्रता से उनके उत्तर लिखिए।



परिवार हरा, हम भी हरे,
एक थैली में तीन-चार भरो।

.....



एक लाठी की अजब कहानी
उसके भीतर मीठा पानी।

.....



एक पक्षी ऐसा,
जिसकी दुम पर पैसा।

.....



लाल डिबिया, पीले खाने,
भीतर रखे मोती के दाने।

.....



जाती हूँ मैं हर जगह,
पर हिलती नहीं किसी भी तरह।

.....









पगरी में भी, गगरी में भी,
और तुम्हारी नगरी में भी।
कच्ची खाओ, पक्की खाओ,
सिर पर उसका तेल लगाओ।

मैं भाग नहीं सकती फिर
भी लोग मुझे बाँधते हैं।
बताओ मैं कौन हूँ?

वह क्या है जहाँ नदी, नहर,
समुद्र है पर गाड़ियाँ नहीं?

वह क्या है जिसे देखा
जा सकता है पर छुआ
नहीं जा सकता?

प्रश्न 4. नीचे कुछ वृक्षों/पौधों की पत्तियों के चित्र हैं। उनके नाम उलट-पुलट गए हैं। उन्हें पहचानकर मिलान कीजिए। अपनी भाषा में भी उनके नाम पता करके लिखिए।

पत्तियों के चित्र	पत्तियों के नाम	आपकी भाषा में नाम
	<ul style="list-style-type: none"> बरगद 	<input type="text"/>
	<ul style="list-style-type: none"> धनिया 	<input type="text"/>
	<ul style="list-style-type: none"> आम 	<input type="text"/>
	<ul style="list-style-type: none"> तुलसी 	<input type="text"/>
	<ul style="list-style-type: none"> केला 	<input type="text"/>
	<ul style="list-style-type: none"> शीशम 	<input type="text"/>

HINDI WORKSHEET



विशेषण (Adjective)

विशेषण की परिभाषा

संज्ञा या सर्वनाम शब्दों की विशेषता प्रकट करने वाले शब्दों को विशेषण कहते हैं।



मधुमक्खियों के छत्ते में बहुत मीठा शहद है।



राहुल बहुत सुंदर चित्रकारी करता है।

सुंदर और मीठा दोनों शब्द संज्ञा के बारे में कुछ विशेष बता रहे हैं।

वाक्य में विशेषण को कैसे पहचाने?



- पहले संज्ञा शब्द को पहचानें।
- फिर संज्ञा के साथ कैसा, कैसी, कितना आदि लगाकर प्रश्न पूछें।



आम कैसा होता है?

आम स्वादिरष्ट होता है। स्वादिरष्ट - विशेषण

विशेष्य की परिभाषा :

विशेषण जिस संज्ञा या सर्वनाम की विशेषता बताता है उसे विशेष्य कहते हैं।



विशेषण

विशेष्य

ठंडी

आइसक्रीम

अनेक

तारे

एक किलो

मिठाई

लम्बी

रेलगाड़ी

गोल

लड्डू



जानिए:

लिंग और वचन के आधार पर विशेषण शब्दों के रूप बदल जाते हैं।

जैसे - अच्छा लड़का अच्छी लड़की अच्छे लड़के

प्रश्न 7. नीचे दिए गए फूल की पंखुड़ियों में रंग शब्द दिए गए हैं। प्रत्येक रंग शब्द से पाँच 'विशेषण' शब्द लिखिए।

विशेषण



प्रश्न 8.

संज्ञा

क] शब्दों में से व्यक्ति, वस्तु, स्थान, प्राणी और भाव संज्ञा शब्दों को छाँटकर लिखिए।

दादाजी किताब हरियाली लड़की मोना दिल्ली गुड़िया घर
सचिन तेंदुलकर चिड़िया राघव बस्ता सड़क मिठास शेर गुब्बारा
पार्क कुरता चूहा खुशी स्कूल डर तितली मोर दर्द

व्यक्ति	वस्तु	स्थान	प्राणी	भाव

ख] शब्दों में से व्यक्ति, वस्तु, स्थान, प्राणी और भाव संज्ञा शब्दों को छाँटकर लिखिए।

गायक वीरता जंगल जीत हथिनी सुरीला कलम
जापान मॉल कश्मीर छात्रा कुत्ता पाठशाला बिल्ला
दूध बंदर बुढ़ापा नानी बच्चों गिलास हलवाई
जलेबियाँ साँप हार मोबाइल

व्यक्ति	वस्तु	स्थान	प्राणी	भाव

प्रश्न 9. Reading Comprehension

गद्यांश (Passage):

गर्मी की छुट्टियाँ शुरू होते ही बच्चों में खुशी की लहर दौड़ जाती है। इस बार मोहित ने अपनी छुट्टियाँ गाँव में बिताने का निश्चय किया। वह अपने दादा-दादी के साथ गाँव गया। वहाँ का वातावरण शहर से बिल्कुल अलग था। चारों ओर हरियाली, खेतों में लहलहाती फसलें और पेड़ों पर चहचहाते पक्षी उसे बहुत अच्छे लगे।

मोहित रोज़ सुबह जल्दी उठता और दादाजी के साथ खेतों में जाता। दादाजी उसे खेती के बारे में नई-नई बातें सिखाते। दादी माँ उसे स्वादिष्ट और ताज़ा भोजन खिलाती थीं। शाम को वह अपने नए दोस्तों के साथ खेलता और बहुत आनंद उठाता।

इन छुट्टियों में मोहित ने न केवल खूब मज़ा किया, बल्कि प्रकृति के महत्व को भी समझा। उसने जाना कि पेड़-पौधे और स्वच्छ वातावरण हमारे जीवन के लिए कितने आवश्यक हैं। छुट्टियाँ समाप्त होने पर वह कई नई यादें और सीख लेकर वापस शहर लौटा।

I. लघुउत्तरीय प्रश्न (Short Answer Questions)

1. मोहित ने अपनी छुट्टियाँ कहाँ बिताईं?

2. गाँव का वातावरण कैसा था?

3. मोहित सुबह किसके साथ खेतों में जाता था?

4. दादी माँ मोहित के लिए क्या करती थीं?

5. मोहित ने छुट्टियों में क्या सीखा?

6. आपको गाँव और शहर में क्या अंतर लगता है?

7. “प्रकृति का महत्व” अपने शब्दों में लिखिए (3-4 वाक्य)।

II. शब्दार्थ लिखिए (Word Meaning):-

1. वातावरण = _____
2. लहलहाती = _____
3. आवश्यक = _____

III. रिक्त स्थान भरिए:-

1. मोहित _____ के साथ गाँव गया।
2. खेतों में _____ लहलहा रही थी।
3. दादी माँ उसे _____ भोजन खिलाती थी।

IV. सही या गलत लिखिए:-

1. मोहित को गाँव पसंद नहीं आया। (_____)
2. मोहित शाम को दोस्तों के साथ खेलता था। (_____)
3. उसने प्रकृति के महत्व को समझा। (_____)

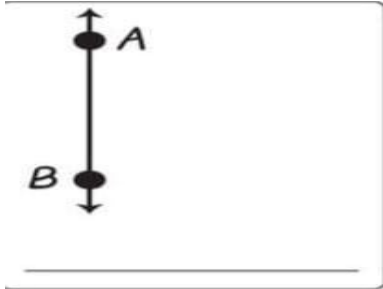

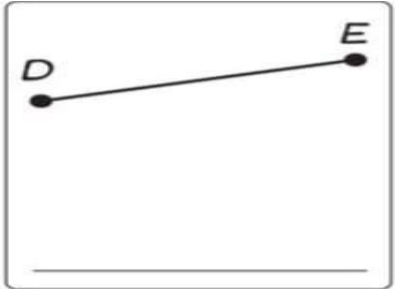
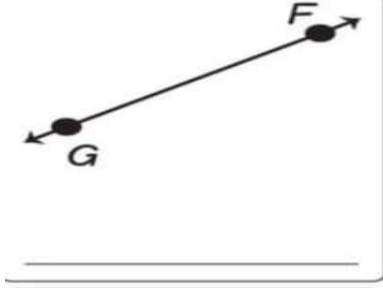
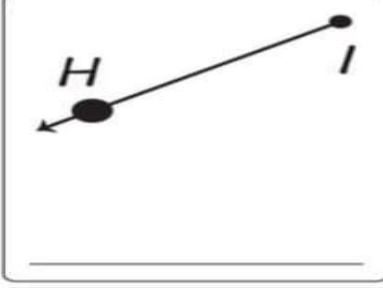
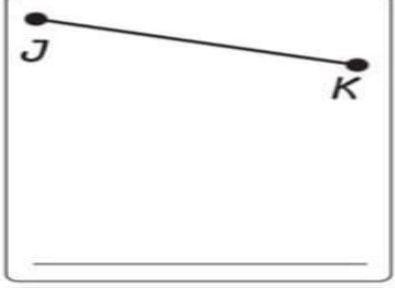
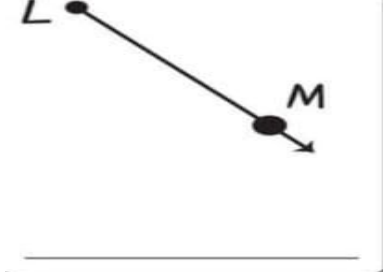
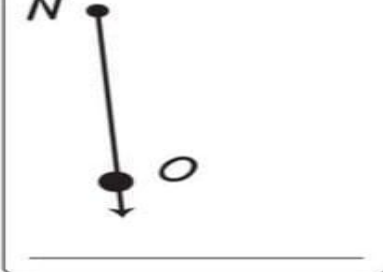
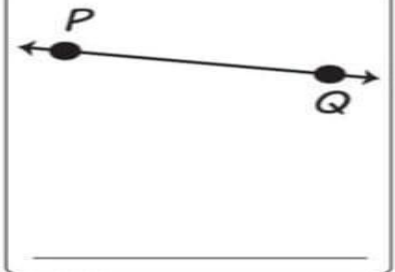
V. वाक्य बनाइए:-

1. वातावरण :- _____
2. प्रकृति :- _____
3. आनंद :- _____

निर्देश:- गद्यांश को ध्यान से पढ़ें | पूरे वाक्यों में उत्तर लिखें | साफ और सुंदर लिखावट रखें |

SUBJECT - MATHS

Q.1 Write point, line, line segment and ray below each picture:


 _____	 _____	 _____
 _____	 _____	 _____
 _____	 _____	 _____

Q.2 Draw a line, line segment and ray.

Q.3 Draw a line segment of following

- a. 5 cm
- b. 4.5 cm
- c. 8 cm
- d. 7 cm
- e. 6.5 cm

Q4. Draw two radii, two diameters, two chords and one center in the given circle in the given circle



Q.5

Tell which images have right angles and which have acute angles.







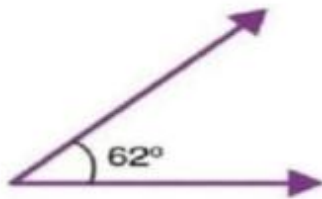




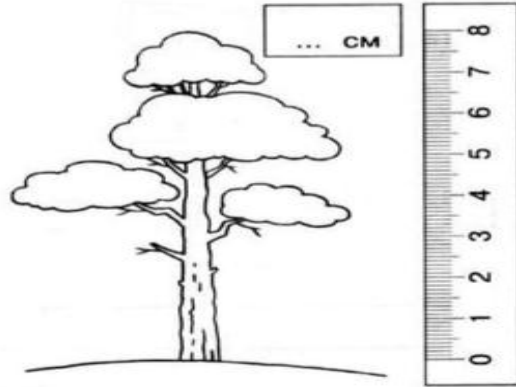

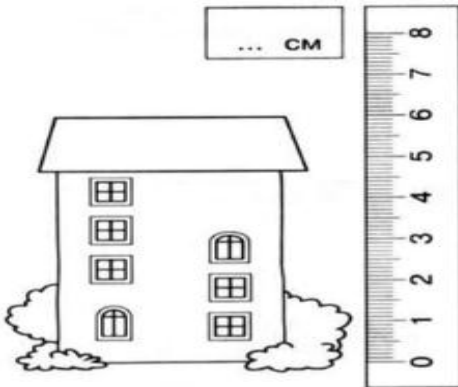








Q.6 Measure the given pictures in cm.



Q.7 Write the alphabets showing an acute and an obtuse angle:

1. Alphabets showing the acute angles _____

2. Alphabets showing the obtuse angles _____

Q.8 Prepare a shopping plan by following the steps below:

Make a list of any 5 items you wish to buy.

You have a total budget of ₹5000.

Choose items in such a way that the total cost stays within the given budget.

Calculate the total amount spent.

Find out the remaining balance.

Present your work in the form of a proper bill.

Q9.

Complete the puzzles to get all the sums correctly

21		15	49
	7		40
		20	50
43	43	53	

7		10	8
	8	9	32
			35
32	34	33	

	11		33
	14	15	39
		12	30
30	33	36	

7		9	23
	10		39
		13	36
32	30	37	

	15		27
8		7	33
		16	39
31	36	29	

		11	31
13	15		40
19			30
31	36	32	


Q.1 The pollution level in our cities and towns is increasing day by day, to solve this problem we can grow some plants that purify the air.

Collect information about five different air purifier plants.

Paste their pictures in your scrapbook and write two sentences about each.

Q.2

Food and Nutrition



Across

- 3. carbohydrates that are not used up are immediately stored as ...
- 7. ...contain vitamins
- 10. difficulty in passing out stool
- 12. keep the body healthy

- 13. ...contain proteins
- 14. needed for growth and repair

Down

- 1. control certain processes in the body
- 2. helps to transport nutrients to cells
- 4. source of energy

- 5. ... contain fats
- 6. this energy value in food is measured in ...
- 8. ...contain only carbohydrates
- 9. milk contain ...
- 11. producing soft feces

Q.3

A Fill in the blanks

1. _____ and _____ juice are rich in carbohydrates.
2. _____ keeps our body warm.
3. _____ helps in making blood.
4. _____ is complete food.
5. _____ and _____ are food preservation.
6. _____ or _____ destroys the nutrients present in food.
7. Proteins are called _____ nutrients.
8. Fats and carbohydrates are also called _____ nutrients.
9. _____ and _____ are called as protective nutrients.
10. People who do lot of physical work need more _____.
11. Food contains _____ that provide nourishment to our body.
12. All things that we eat everyday is called _____.
13. Our hair is made up of _____.
14. Water makes up nearly _____ of our body weight.
15. A _____ contains all the nutrients such as carbohydrate, fat, proteins, vitamins, minerals and roughage in correct amount.

B Circle the odd one out.

1. Rice, wheat, soya bean, potatoes
2. Calcium, vitamin D, iron, potassium
3. Oil, cheese, milk, eggs

Q.4



Name the following :

1. Name any fruit with many seeds :

2. Name any fruit with one seed :

3. Name two major parts of a plant :

.....



4. Two vegetables that can be eaten raw :



5. Two leaves used as medicines :

6. Name a fruit with no seed :

7. Name any two flowers :




Hints :

Banana, Amla, Plum, Papaya, Pear
Tulsi, Mango, Rose, Watermelon
Neem, Henna, Mint, Coriander,

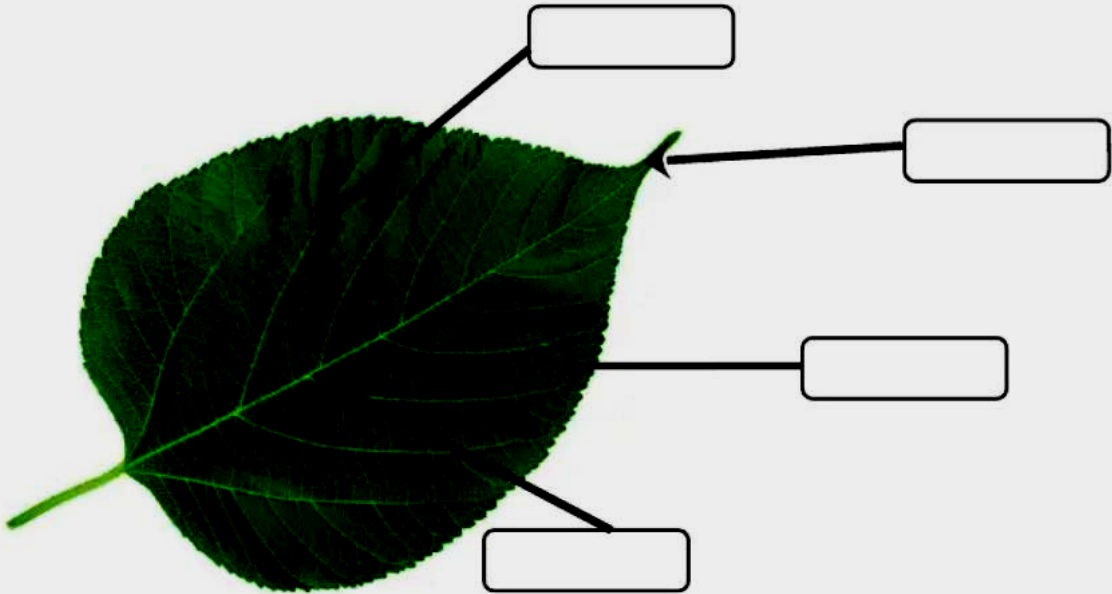


Q.5 How plants are useful to us? Paste the thing that we get from plants, to complete the tree.(You can paste pulses, paper, medicines, etc.)



Q.6

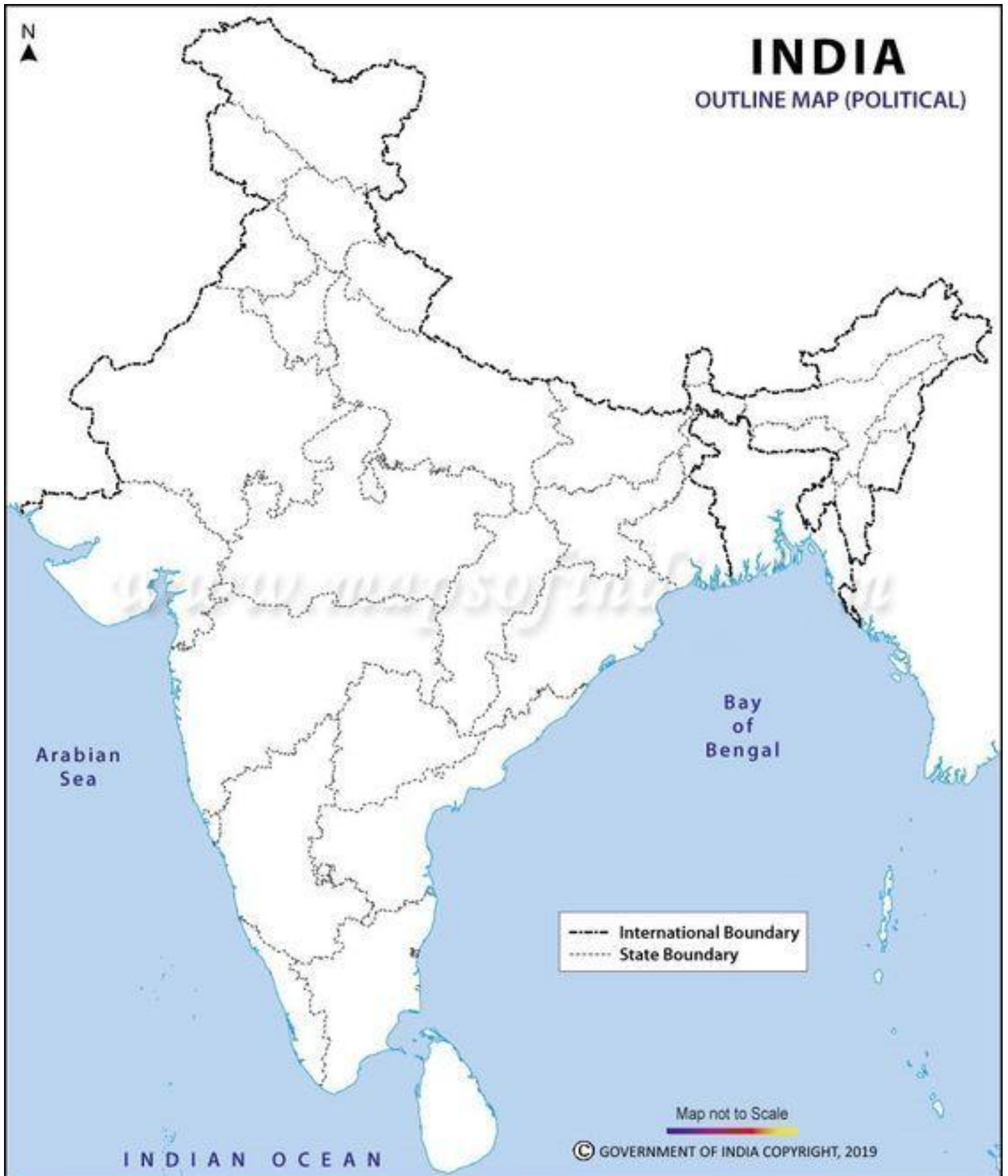
A Label the various parts of leaf.



B Give two examples for each of the following.

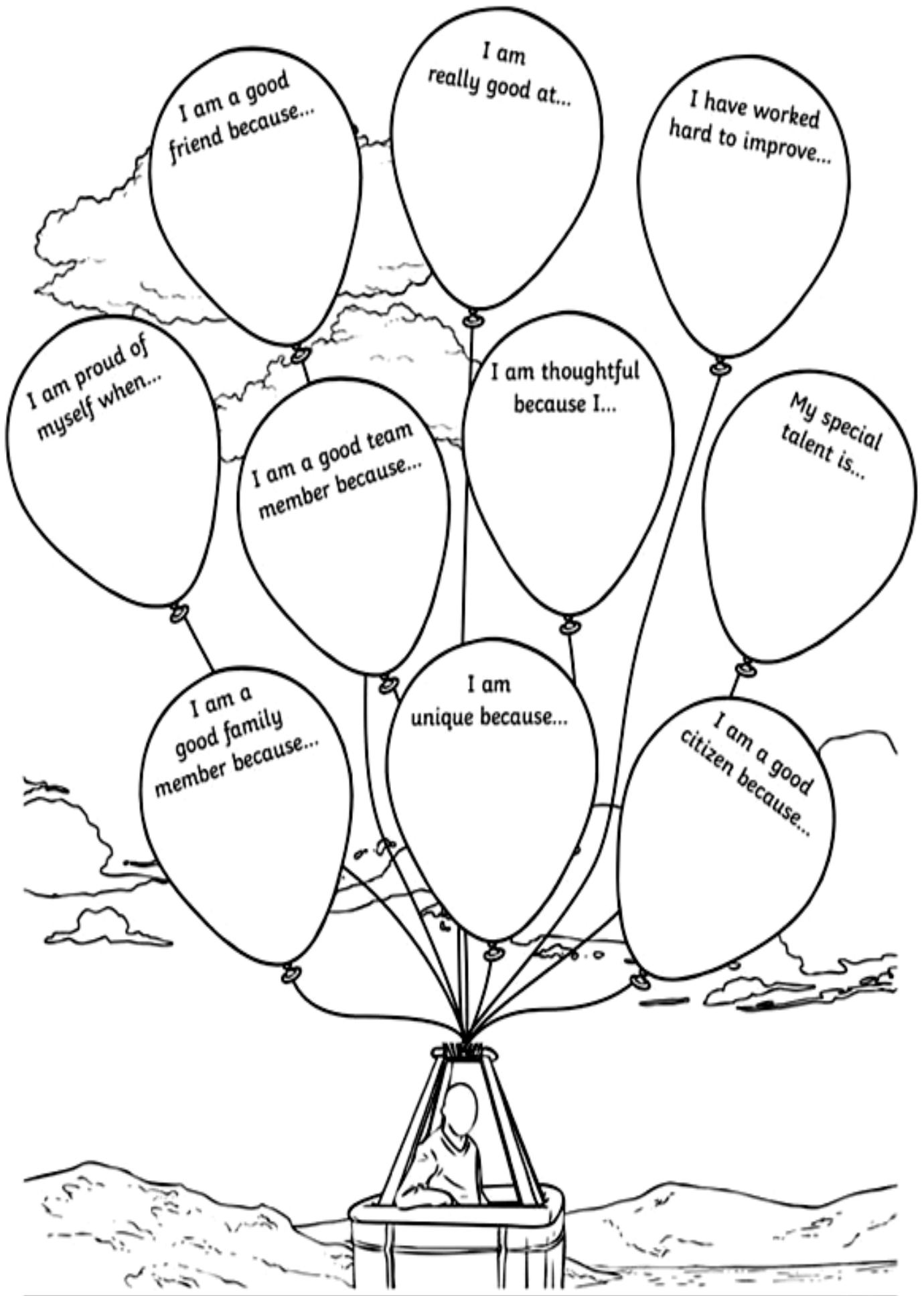
- 1. Leaves that contain stored food which you eat:- _____
- 2. Plants lacking chlorophyll:- _____
- 3. Insectivorous plants:- _____
- 4. Name parts of plant that we eat:- _____
- 5. Name the things a leaf requires to prepare food:- _____
- 6. Name the parts of a plant in which a plant store food:- _____
- 7. Name two leaves that are used as medicine:- _____

Q.1 On the political map of India mark 28 states.



I Am an Amazing Person!

Read and finish the sentences in the balloons below.



my **HELPING OTHERS** plan



I can help at SCHOOL by...



I can help my FAMILY by...

I can help my FRIEND(s) by...



I can help my TEACHER by...



I can help the EARTH  by...



I can help SOMEONE I DON'T KNOW WELL by...



I can help ANIMALS by...

I can help my COMMUNITY by...



Q.4

Jar Full of Love

Can you fill the hearts with things you love?













A 5 Minute Activity

Write three words in each category!

1	What can you use water for?	<input type="text"/>	<input type="text"/>	<input type="text"/>
2	What can you eat for dinner?	<input type="text"/>	<input type="text"/>	<input type="text"/>
3	Things that are naturally red!	<input type="text"/>	<input type="text"/>	<input type="text"/>
4	Words that begin with sun-	<input type="text"/>	<input type="text"/>	<input type="text"/>
5	Words that begin with sp-	<input type="text"/>	<input type="text"/>	<input type="text"/>
6	Types of transportation	<input type="text"/>	<input type="text"/>	<input type="text"/>
7	Words that end in -ment	<input type="text"/>	<input type="text"/>	<input type="text"/>
8	Things with a screen	<input type="text"/>	<input type="text"/>	<input type="text"/>
9	Words that start with re-	<input type="text"/>	<input type="text"/>	<input type="text"/>
10	Kinds of trees	<input type="text"/>	<input type="text"/>	<input type="text"/>
11	Pets	<input type="text"/>	<input type="text"/>	<input type="text"/>
12	Things in the bathroom	<input type="text"/>	<input type="text"/>	<input type="text"/>
13	Circular things	<input type="text"/>	<input type="text"/>	<input type="text"/>
14	White things	<input type="text"/>	<input type="text"/>	<input type="text"/>
15	What you can do to your hair	<input type="text"/>	<input type="text"/>	<input type="text"/>








SUBJECT – COMPUTER

Q.1 Tick (✓) the correct option

No	Nama	Gambar	Software	Hardware
1	Monitor			
2	Windows (Operating System)			
3	Mouse			
4	Printer			
5	Chrome			
6	Microsoft Word			
7	Keyboard			
8	Speaker			
9	Gmail			
10	Spreadsheets			

Q.2

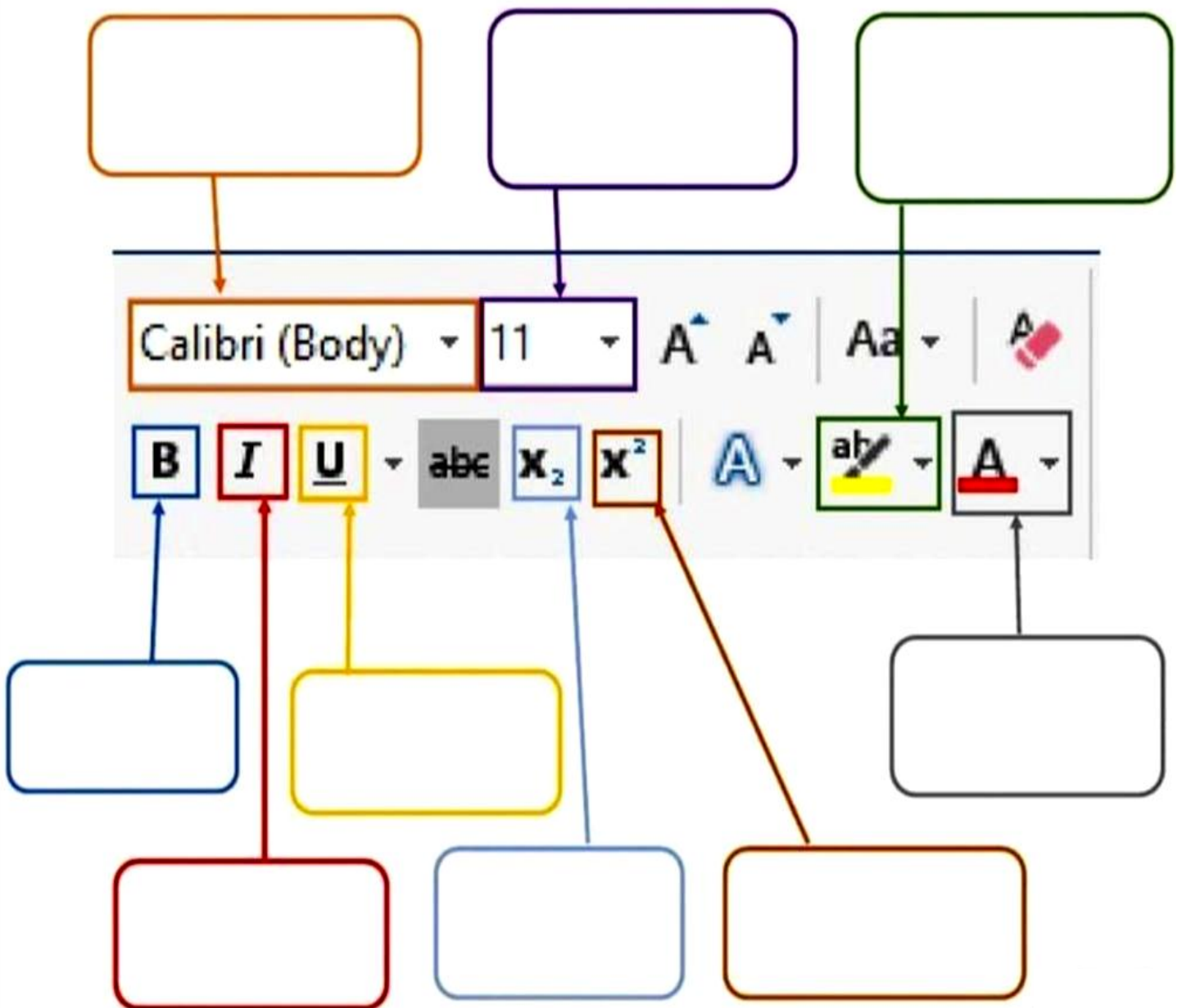
Find the given one is hardware or software

 Monitor	<input type="checkbox"/> Hardware	<input type="checkbox"/> Software
 MS Excel	<input type="checkbox"/> Hardware	<input type="checkbox"/> Software
 Printer	<input type="checkbox"/> Hardware	<input type="checkbox"/> Software
 Tux Paint	<input type="checkbox"/> Hardware	<input type="checkbox"/> Software
 Pen Drive	<input type="checkbox"/> Hardware	<input type="checkbox"/> Software
 ZOOM App	<input type="checkbox"/> Hardware	<input type="checkbox"/> Software
 WINDOWS 7	<input type="checkbox"/> Hardware	<input type="checkbox"/> Software
 Mouse	<input type="checkbox"/> Hardware	<input type="checkbox"/> Software

Q.3

Fill in the blanks using the words given below.

Font , Size , Bold , Underline ,Color ,Highlight ,
Superscript , Subscript , Italic



Q.4 Match the Keyboard shortcut keys.

Cut	Ctrl + B
Redo	Ctrl + V
Select All	Ctrl + N
Paste	Ctrl + Y
Copy	Ctrl + S
Undo	Ctrl + X
Bold	Ctrl + A
Save	Ctrl + U
Open	Ctrl + I
Underline	Ctrl + P
New	Ctrl + C
Print	Ctrl + Z
Italic	Ctrl + O

Q.5 Write your name in six different fonts, size and color in MS- Word.
Take it's printout and paste it on a A4 size chart paper.

SUBJECT – ART & CRAFT

Art :- Make a drawing using flower impression (Garden, Greeting Card, Flower Pot) by using water colour on 1/4th white chart paper.

Craft:- (paper Collage)

Create a landscape collage by layering torn or cut coloured papers.